



SUMMER MATH and READING for RISING 5th GRADE 2023



Summer greetings everyone!

Congratulations on completing a great year in Fourth Grade! I'm so glad I was able to meet with your class this Spring to give you some idea of what Fifth Grade will be like next year. Hopefully, it will help to know what your new classroom looks like and to have a sense of how middle school works when we begin in the Fall.

Here are the directions for your summer math and reading assignments. The purpose of these assignments is for you to gently practice your academic skills over the weeks we are away so they stay fresh in your mind. The best way to do that is to do a little bit each week - both math and reading. Try to avoid waiting until the last few weeks when you might feel rushed. For each subject, I'll suggest some time guidelines to help you complete the work at a comfortable pace.

MATH: What do we need to do? When should we do it?

For math, you will work on the provided worksheets from your 4th Grade workbook. These pages review the skills you learned in class. **You should complete one worksheet (both sides of one page) each week.** An answer key is provided for all of the ODD numbered problems. Some problems are crossed out and don't need to be completed.

READING: What do we need to read? When should we do it?

Hopefully, everyone will read LOTS of books over the summer, but you are expected to read 3 fiction novels PLUS the book, *Wonder* by R.J. Palacio. Your chosen books should be chapter books that are at or above your grade level (no graphic novels). Use the list of recommended titles, or find one on your own. You

can pick any genre (for example, mystery or historical fiction), but be sure they are fiction. **You should try to read a book every 2 weeks.** I suggest you read *Wonder* last since it is the book we'll discuss the first week of school.

What do we do after we read?

For your 3 choice books, you'll fill in the attached *READ & RETELL* form. That means you'll turn in 3 forms the first week of school. **You should spend about 30 minutes on each story form telling me about the main character, the story setting, and 2 or 3 main events that involve the main character. You should also tell me how the book ends.**

For *WONDER*, please select *ONE* of the four character posters provided. You will fill in information about memorable moments, notable quotations, physical traits, and personality traits. Then, *COLOR* the poster using crayons or colored pencils. You can do more, if you like, but *ONE completed poster is expected to be turned in* the first week of school.

I hope you enjoy your summer and learn new things outside of school. I look forward to seeing everyone in the Fall and starting our adventure together in 5th Grade! ~Ms. Freeman



Name _____



Read & Retell

Use this organizer to record information about one of the 3 chapter books you read this summer. You will complete 3 forms over the summer.

Book Title: _____

Author: _____

Number of pages: _____

Check what kind of book this is:

___mystery ___fantasy ___historical fiction

___realistic fiction ___other ___not sure

Why did you choose this book?

Tell us about your book. Who is your main character and what is the setting? What challenge is the main character faced with. What happens to him or her in the end?

If you need more space, use looseleaf or write on the back.

[illegible]

Via

Character Trait: _____

Quotation #1: *Example on page* _____

Character Trait: _____

Quotation #1: *Example on page* _____

2 PHYSICAL

CHARACTER TRAITS

memorable
moments

NOTABLE
QUOTATIONS

Page _____ Quotation #1: _____

Quotation #2: *Page* _____

Page _____ Quotation #3: _____

2 PERSONALITY

CHARACTER TRAITS

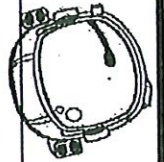
Character Trait: _____

Quotation: _____

Character Trait: _____

Quotation: _____

Example on page _____



Jack Will

NOTABLE QUOTATIONS

Page _____ Quotation #1: _____

Quotation #2: _____

Page _____

Page _____ Quotation #3: _____

Character Trait: _____

Quotation #1: *Example on page* _____

Character Trait: _____

Quotation #1: *Example on page* _____

PHYSICAL

CHARACTER TRAITS

memorable moments

PERSONALITY

CHARACTER TRAITS

Character Trait: _____

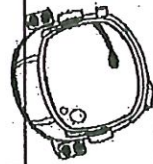
Quotation: _____

Example on page _____

Character Trait: _____

Quotation: _____

Example on page _____




Julian

NOTABLE QUOTATIONS

Page _____ Quotation #1: _____

Quotation #2: _____ Page _____

Page _____ Quotation #3: _____



2 PERSONALITY

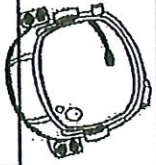
CHARACTER TRAITS

Character Trait: _____ Example on page _____

Quotation: _____

Character Trait: _____ Example on page _____

Quotation: _____




Character Trait: _____
Quotation #1: _____ Example on page _____

Character Trait: _____
Quotation #1: _____ Example on page _____

2 PHYSICAL CHARACTER TRAITS

memorable moments



Summer

NOTABLE QUOTATIONS

Page _____ Quotation #1: _____

Page _____ Quotation #2: _____

Page _____ Quotation #3: _____



Character Trait: _____

Quotation #1: Example on page _____

Character Trait: _____

Quotation #1: Example on page _____

2PHYSICAL

CHARACTER TRAITS

memorable
memorable

2PERSONALITY

CHARACTER TRAITS

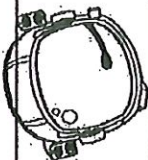
Character Trait: _____

Quotation: _____

Character Trait: _____

Quotation: _____

Example on page _____



RECOMMENDED TITLES

5th and 6th Grades

ACROSS FIVE APRILS Hunt, I.
 THE ADVENTURES OF TOM SAWYER,
 TWAIN, M.
 ALL CREATURES GREAT AND SMALL
 Herriot, J.
 ARTEMIS FOWL Coifer, E.
 A SINGLE SHARD Park, L.
 BECAUSE OF WINN DIXIE DiCamillo, K.
 THE BFG Dahl, R.
 BLUE HERON Avi
 THE BOY WHO REVERSED HIMSELF
 Sleater, W.
 BRIDGE TO TERABITHIA Patterson, K.
 BUD, NOT BUDDY Curtis, C.
 THE CHRONICLES SERIES Lewis, C.
 CRISPIN: CROSS OF LEAD Avi
 DEATH ON THE NILE Christie, A.
 ERAGON Paolini, C.
 FLIPPED Van Draanen, W.
 THE GIRL WHO DRANK THE MOON Barnhill,
 K.
 THE GRAVEYARD BOOK Gaiman, N.
 THE INVENTION OF HUGO CABRET Selznick,
 B.
 HARRY POTTER SERIES Rowling, J.
 HATCHET Paulsen, G.
 THE HOBBIT Tolkien, J.
 HOLES Sachar, L.
 HOOT Hiaasen, C.
 THE HOUSE OF DIES DREAR Hamilton, V.
 THE HOUSE OF THE SCORPION Farmer, N.
 ISLAND OF THE BLUE DOLPHINS O'Dell, S.
 JASON'S GOLD Hobbs, W.
 JOEY PIGZA SWALLOWED THE KEY Gantos,
 J.
 JULIE OF THE WOLVES George, J.
 LOSER Spinelli, J.

MATILDA Dahl, R.
 M.C. HIGGINS THE GREAT Hamilton, V.
 MISTY OF CHINCOTEAGUE Henry, M.
 MY SIDE OF THE MOUNTAIN George, J.
 NUMBER THE STARS Lowery, L.
 POPPY Avi
 RALPH S. MOUSE Cleary, B.
 SHILOH Naylor, P.
 THE STORY OF KING ARTHUR AND HIS
 KNIGHTS Pyle, H.
 THE LIGHTNING THIEF Riordan, R.
 THE RED ROSE BOX Woods, B.
 THE RED PYRAMID Riordan, R.
 SCHOOLED Gordon Korman
 THE SECRET GARDEN Burnett, F.
 THE SILENT STORM Garland, S.
 SOUNDER Armstrong, W.
 SUMMER OF MY GERMAN SOLDIER Green,
 B.
 SUMMER OF THE MONKEYS Rawls, W.
 TANGERINE Bloor, E.
 TIES THAT BIND, TIES THAT BREAK
 Namioka, L.
 TREASURE ISLAND Stevenson, R.
 TUCK EVERLASTING Babbitt, N.
 WALK TWO MOONS, Creech, S.
 THE WATSONS GO TO BIRMINGHAM
 Curtis, C.
 THE WESTING GAME Raskin, E.
 WHERE THE LILIES BLOOM Cleaver, V.
 WHERE THE RED FERN GROWS Rawls, W.
 THE WOLVES OF WILLOUGHBY CHASE
 Aiken, J.
 A WRINKLE IN TIME L'Engle, M.

A Boy at War by Harry Mazer
 A Long Walk to Water by Linda Sue Park
 A Long Way from Chicago by Richard Peck
 Al Capone Does My Shirts By Gennifer
 Choldenko
 A Series of Unfortunate Events Series by Lemony
 Snicket

Allies by Alan Gratz
 Brighty of the Grand Canyon by Marguerite Henry
 Charlotte's Web by E. B. White
 Chomp by Carl Hiaasen
 Diary of a Wimpy Kid Series by Jeff Kinney
 Fablehaven by Brandon Mull
 Frindle by Andrew Clements
 Harriet the Spy by Louise Fitzhugh
 How to Eat Fried Worms by Thomas Rockwell
 James and the Giant Peach by Roald Dahl
 Kokopelli's Flute by Will Hobbs
 Love That Dog by Sharon Creech
 Mrs. Frisby and the Rats of NIHM by Robert C. O'Brien
 One Crazy Summer by Rita Williams-Garcia
 Pax by Sara Pennypacker
 Rascal by Sterling North
 Rules by Cynthia Lord
 Runaway Ralph by Beverly Cleary
 Stone Fox by John Reynolds
 Gardiner Tales from Silver Lands by Charles J. Finger
 The Black Stallion by Walter Farley
 The Boy Who Harnessed the Wind by William Kamkwamba & Bryan Mealer
 The Cow-Tail Switch and other West African Stories by Harold Courlander and George Herzog
 The Cricket in Times Square by George Selden
 The Egypt Game by Zilpha Keatley Snyder
 The Incredible Journey by Sheila Burnford
 The Indian in the Cupboard by Lynne Reid Banks
 The Library Card by Jerry Spinelli
 The One and Only Ivan by Katherine Applegate
 The Penderwicks: A Summer Tale of Four Sisters, Two Rabbits, and a Very Interesting Boy by Jeanne Birdsall
 Prisoner by Alan Gratz
 Project 1065 by Alan Gratz
 Refugee by Alan Gratz
 The Sign of the Beaver by Elizabeth George Speare

The War That Saved My Life by Kimberly Brubaker Bradley
 The Watsons Go to Birmingham — 1963 by Christopher Paul Curtis
 The Word Eater by Mary Amato Wayside School Series by Louis Sachar


New in 2021 by Student Request

Up The Creek by Kevin Miller
Destiny's Safari (Series) by Sally M Jones
The Last Musketeer (series) by Stuart Gibbs
Spy School by Stuart Gibbs
Everlost by Neal Shusterman
Navigating Early by Clare Vanderpool
 Dough Boys by Paula Chase
 New Kid by Jerry Craft
 The Usual Suspects by Maurice Broaddus
Beverly, Right Here by Kate DiCamillo
 The Apothecary Series by Maile Meloy
H.I.V.E by Mark Walden

SUMMER MATH PACKET

Rising 5th Grade

June-August, 2023



Name _____

Dear Students and Families -

This packet provides practice pages from your 4th Grade workbook. It reviews math skills learned this past year. Students should look through the entire packet to see what topics are covered. They should complete ONE page each week (front and back of one page) in order to complete the packet by the first day of school. DO NOT WAIT UNTIL AUGUST to start! This should be a gentle review of skills to prepare you for a smooth start when we return in the Fall. An ANSWER KEY for the ODD problems is provided. Some problems are crossed out and do not need to be completed.

Parent signature: _____

Date: _____

Another Look!

You can add two or more numbers when you line up the numbers by place value. Add one place at a time.

Homework & Practice 2-3

Add Whole Numbers

Find $3,456 + 2,139 + 5,547$.Estimate: $3,500 + 2,100 + 5,500 = 11,100$ **Step 1**

Line up the numbers by place value.

Add the ones.

Regroup if needed.

$$\begin{array}{r} 3,456 \\ 2,139 \\ + 5,547 \\ \hline 2 \end{array}$$

Regroup 22 ones as 2 tens and 2 ones.

Step 2

Add the tens and hundreds.

Regroup if needed.

$$\begin{array}{r} 1 \ 12 \\ 3,456 \\ 2,139 \\ + 5,547 \\ \hline 142 \end{array}$$

Keep digits in columns as you add.

Step 3

Add the thousands.

Remember to regroup for ten thousands if necessary.

$$\begin{array}{r} 1 \ 12 \\ 3,456 \\ 2,139 \\ + 5,547 \\ \hline 11,142 \end{array}$$

11,142 is close to the estimate of 11,100.

For 1–8, find each sum.

1. $\begin{array}{r} 9,945 \\ + 3,343 \\ \hline \end{array}$

2. $\begin{array}{r} 12,566 \\ + 5,532 \\ \hline \end{array}$

3. $\begin{array}{r} 387,969 \\ + 562,031 \\ \hline \end{array}$

4. $\begin{array}{r} 629,979 \\ 294,116 \\ + 75,905 \\ \hline \end{array}$

5. $\begin{array}{r} 227,418 \\ 196,735 \\ + 48,062 \\ \hline \end{array}$

6. $\begin{array}{r} 82,011 \\ 96,489 \\ + 76,988 \\ \hline \end{array}$

7. $\begin{array}{r} 126,267 \\ 15,809 \\ + 8,764 \\ \hline \end{array}$

8. $\begin{array}{r} 45,101 \\ 35,099 \\ + 10,000 \\ \hline \end{array}$

Use estimation to check if your answer is reasonable.



Name _____



2

Homework & Practice 2-5

Subtract Across Zeros

Another Look!

Find $700,402 - 297,354$.

Estimate: $700,000 - 300,000 = 400,000$

Step 1

$$\begin{array}{r} 700,402 \\ - 297,354 \\ \hline \end{array}$$

You cannot subtract 4 ones from 2 ones, so you must regroup. Since there is a zero in the tens place, you must regroup 4 hundreds as 3 hundreds, 9 tens, and 10 ones.

$$\begin{array}{r} 700,402 \\ - 297,354 \\ \hline \end{array}$$

Step 2

$$\begin{array}{r} 6\overset{9}{\cancel{0}}0\overset{3}{\cancel{0}}\overset{10}{\cancel{2}} \\ - 297,354 \\ \hline \end{array}$$

Since there are zeros in the thousands and ten thousands places, you can regroup 700 thousands as 6 hundred thousand 9 ten thousands, and 10 thousands.

Step 3

$$\begin{array}{r} 6\overset{9}{\cancel{0}}0\overset{3}{\cancel{0}}\overset{10}{\cancel{2}} \\ - 297,354 \\ \hline 403,048 \end{array}$$

Now you can subtract.

Step 4

$$\begin{array}{r} 11\overset{11}{297,354} \\ + 403,048 \\ \hline 700,402 \end{array}$$

You can check your answer by using addition.

You can use these steps to subtract across zeros.



For 1–12, subtract.

1. $\begin{array}{r} 61,070 \\ - 4,981 \\ \hline \end{array}$

2. $\begin{array}{r} 5,707 \\ - 2,058 \\ \hline \end{array}$

3. $\begin{array}{r} 815,950 \\ - 423,147 \\ \hline \end{array}$

4. $\begin{array}{r} 90,800 \\ - 37,638 \\ \hline \end{array}$

5. $\begin{array}{r} 102,604 \\ - 6,174 \\ \hline \end{array}$

6. $\begin{array}{r} 22,700 \\ - 20,487 \\ \hline \end{array}$

7. $\begin{array}{r} 40,200 \\ - 29,526 \\ \hline \end{array}$

8. $\begin{array}{r} 600,470 \\ - 307,299 \\ \hline \end{array}$

9. $8,106 - 2,999$

10. $214,507 - 83,569$

11. $10,400 - 6,392$

12. $45,500 - 9,450$

Name _____

★ Guided Practice ★

Do You Understand?

1. What is the missing factor?

$$\begin{array}{r} 47 \\ \times \square\square \\ \hline 94 \\ + 1,410 \\ \hline 1,504 \end{array}$$

2. **Look for Relationships** When you use the algorithm shown on the previous page to multiply two 2-digit numbers, why does the second partial product end in 0?

Do You Know How?

For 3–6, find the products. ~~Draw area models as needed.~~

3.
$$\begin{array}{r} 37 \\ \times 83 \\ \hline \square\square\square \\ + \square, \square\square\square \\ \hline \square, \square\square\square \end{array}$$

4.
$$\begin{array}{r} 62 \\ \times 17 \\ \hline \square\square\square \\ + \square\square\square \\ \hline \square, \square\square\square \end{array}$$

5.
$$\begin{array}{r} 43 \\ \times 56 \end{array}$$

6.
$$\begin{array}{r} 67 \\ \times 39 \end{array}$$

★ Independent Practice ★

For 7–21, find each product.

7.
$$\begin{array}{r} 36 \\ \times 29 \end{array}$$

8.
$$\begin{array}{r} 84 \\ \times 37 \end{array}$$

9.
$$\begin{array}{r} 47 \\ \times 46 \end{array}$$

10.
$$\begin{array}{r} 71 \\ \times 63 \end{array}$$

11.
$$\begin{array}{r} 89 \\ \times 52 \end{array}$$

12.
$$\begin{array}{r} 25 \\ \times 64 \end{array}$$

13.
$$\begin{array}{r} 77 \\ \times 33 \end{array}$$

14.
$$\begin{array}{r} 92 \\ \times 19 \end{array}$$

15.
$$\begin{array}{r} 54 \\ \times 64 \end{array}$$

16.
$$\begin{array}{r} 75 \\ \times 35 \end{array}$$

17. 18×21

18. 12×17

19. 72×55

20. 67×14

21. 99×11

You can draw arrays, area models, or use an algorithm to find the products.



Problem Solving

4

22. Fill in the missing digits to complete the calculation.



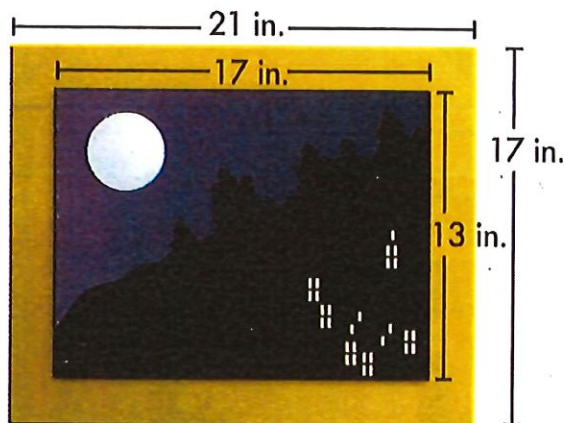
Which digit must go in the ones place of the first partial product?

$$\begin{array}{r} 37 \\ \times \square 6 \\ \hline 2\square\square \\ + 740 \\ \hline 9\square 2 \end{array}$$

Optional

23. One pine tree produced 78 pinecones with an average of 42 seeds in each pinecone. Another tree produced 72 pinecones with an average of 53 seeds in each pinecone. Estimate to find which pine tree produced more seeds. Multiply to check your estimate.

24. **Higher Order Thinking** A picture is 13 inches long and 17 inches wide. It is placed in a wood frame. What is the area of the frame?



This problem has a hidden question.



Assessment

25. An airport serves 14 different airlines. Each airline schedules 45 departing flights each day. How many flights depart from the airport in one day?
- (A) 205 flights
(B) 550 flights
(C) 610 flights
(D) 630 flights
26. Patrick picks 18 apples from each of 24 trees. How many apples did Patrick pick?
- (A) 432 apples
(B) 622 apples
(C) 834 apples
(D) 934 apples

Name _____



5

Homework & Practice 5-9

Continue to Divide
with 1-Digit Numbers

Another Look!



Use the same steps for dividing a 4-digit number that you used for dividing 3-digit numbers.

Find $5,490 \div 6$.

Estimate first. You can use compatible numbers to divide mentally.

54 is a multiple of 6.

5,400 is close to 5,490, and $5,400 \div 6$ is easy to divide.

$$5,400 \div 6 = 900$$

Divide to find the actual quotient.

$$\begin{array}{r} 915 \\ 6 \overline{)5,490} \\ \underline{-54} \\ 09 \\ \underline{-6} \\ 30 \\ \underline{-30} \\ 0 \end{array}$$

Compare. Is the estimate close to the quotient?

The estimate of 900 is close to the actual quotient of 915, so the answer is reasonable.

For 1–2, estimate first. Then find each quotient.

1. Divide $4,318 \div 7$

2. Divide $4,826 \div 5$

Estimate:

Estimate:

$$4,318 \div 7 =$$

$$4,826 \div 5 =$$

Pick 3 to solve.

3. $8 \overline{)4,377}$

4. $9 \overline{)7,192}$

5. $6 \overline{)2,750}$

6. $4 \overline{)6,208}$

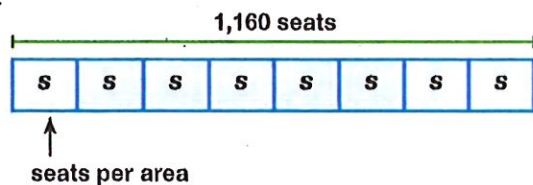
7. $7 \overline{)2,025}$

8. $5 \overline{)9,490}$

9. **Math and Science** Sound travels in waves. In dry air at 20° Celsius, sound travels about 343 meters in one second. How many meters will sound travel in 7 seconds?

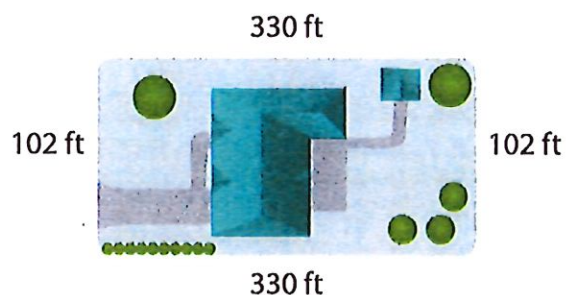
10. **Construct Arguments** Lilly estimated a quotient of 120 and found an actual quotient of 83. What should she do next? Explain.

11. At the airport, there are a total of 1,160 seats in the waiting areas. There are 8 separate, same size, waiting areas. How many seats are in each waiting area?



12. A fence around the school football field is 1,666 feet long. Seven teams of students will paint the fence. Each team will paint an equal length of the fence. What length of the fence will each team paint?

13. **Higher Order Thinking** Mr. Connors put a fence around the outside of his rectangular yard shown at the right. He put a fence post every 6 feet. How many fence posts did he use?



Optional

Assessment

14. Use each number in the box once to complete the division.

$$\begin{array}{r}
 1, \square 41 \text{ R } \square \\
 5 \overline{) 6,20 \square} \\
 \underline{-5} \\
 1 \\
 \underline{-1} \\
 0 \\
 \underline{-20} \\
 06 \\
 \underline{-} \\

 \end{array}$$

0	1	1	2
2	2	5	6

me _____

Guided Practice

Do You Understand?

1. Use division to show $\frac{9}{12}$ and $\frac{3}{4}$ are equivalent fractions.

Example: $\frac{9}{12} \div 3 = \frac{3}{4}$

2. **Reasoning** Is there a fraction with a smaller numerator and denominator that is equivalent to $\frac{4}{12}$? Explain.

Do You Know How?

For 3–8, divide to find equivalent fractions.

3. $\frac{6}{10} = \frac{\square}{\square}$

4. $\frac{8}{12} = \frac{\square}{\square}$

5. $\frac{8}{12} = \frac{\square}{3}$

6. $\frac{10}{12} = \frac{5}{\square}$

7. $\frac{2}{10} = \frac{\square}{5}$

8. $\frac{10}{100} = \frac{\square}{10}$

Independent Practice

Leveled Practice For 9–16, divide to find equivalent fractions.

9. $\frac{6}{12} \div \frac{6}{6} = \frac{\square}{\square}$

10. $\frac{70}{10} \div \frac{5}{5} = \frac{\square}{\square}$

11. $\frac{2}{6} \div \frac{2}{2} = \frac{\square}{\square}$

12. $\frac{50}{100} \div \frac{10}{10} = \frac{\square}{\square}$

3. $\frac{9}{6} \div \frac{\square}{\square} = \frac{3}{\square}$

14. $\frac{10}{4} \div \frac{\square}{\square} = \frac{\square}{2}$

15. $\frac{4}{12} \div \frac{\square}{\square} = \frac{\square}{6}$

16. $\frac{2}{8} \div \frac{\square}{\square} = \frac{\square}{4}$

For 17–24, divide to find two equivalent fractions.

7. $\frac{20}{100}$

Example:
 $\frac{40}{10} \div 2 = \frac{20}{5}$
 or $\frac{40}{10} \div 5 = \frac{8}{2}$

19. $\frac{16}{12}$

20. $\frac{12}{8}$

11. $\frac{24}{12}$

22. $\frac{10}{100}$

23. $\frac{90}{10}$





24. $\frac{80}{100}$

Problem Solving

8

For 25–27, use the table at the right.

25. Complete the table at the right by writing the fraction of the day each animal sleeps and an equivalent fraction. Remember, there are 24 hours in a day.
26. Suppose the cow slept 4 more hours. What fraction of the day would the cow spend sleeping?
27. How many hours does a tiger sleep in 7 days?

Animal	Number of Hours Spent Sleeping	Fraction of the Day Spent Sleeping	Equivalent Fraction
Cat 	12		
Cow 	4		
Squirrel 	15		
Tiger 	16		

28. **Make Sense and Persevere** Ethan ate $\frac{4}{8}$ of the sandwich. Andy ate $\frac{1}{2}$ of the sandwich. The sandwiches were the same size.
 - a. Whose sandwich had more equal parts?
 - b. Whose sandwich had larger equal parts?
 - c. Who ate more? Explain.

Higher Order Thinking If the numerator and denominator of a fraction are both odd numbers, can you write an equivalent fraction with a smaller numerator and denominator? Explain.

Assessment

30. Which equation is **NOT** true?

- (A) $\frac{12}{10} = \frac{6}{5}$
- (B) $\frac{3}{1} = \frac{30}{10}$
- (C) $\frac{6}{12} = \frac{2}{3}$
- (D) $\frac{8}{6} = \frac{16}{12}$

31. There are 12 students in DeLynn's class. Eight students own pets. Which shows the fraction of the class that owns pets?

- (A) $\frac{8}{12}$
- (B) $\frac{1}{2}$
- (C) $\frac{6}{4}$
- (D) $\frac{12}{8}$

me

Guided Practice

Do You Understand?

1. Brenda adds $1\frac{1}{8}$ cups of peat moss to her soil in the problem on the previous page. How much soil does Brenda now have? Explain.

Do You Know How?

For 3–8, find each sum.

3. $1\frac{7}{8} + 1\frac{2}{8}$

4. $2\frac{4}{10} + 5\frac{5}{10}$

5. $4\frac{2}{3} + 1\frac{2}{3}$

6. $6\frac{5}{12} + 4\frac{11}{12}$

7. $2\frac{1}{3} + 2\frac{1}{3}$

8. $8\frac{9}{12} + 5\frac{5}{12}$

2. **Make Sense and Persevere** Use another strategy to find the sum of $4\frac{2}{8} + 1\frac{1}{8}$.

Independent Practice

Leveled Practice For 9–22, find each sum by adding mixed numbers or by adding equivalent fractions.

9. a. Add the fractions.

- b. Add the whole numbers.

- c. Write the fraction as a mixed number.

$$\begin{array}{r} 1\frac{3}{6} \\ + 2\frac{4}{6} \\ \hline \square = \square \end{array}$$

10. a. Write the mixed numbers as fractions.

- b. Add the fractions.

- c. Write the fraction as a mixed number.

$$\begin{array}{r} 2\frac{1}{4} = \square \\ + 3\frac{2}{4} = \square \\ \hline \square = \square \end{array}$$

11. $2\frac{5}{6} + 5\frac{4}{6}$

12. $11\frac{7}{10} + 10\frac{9}{10}$

13. $9\frac{7}{8} + 7\frac{5}{8}$

14. $5\frac{7}{8} + 8\frac{1}{8}$

15. $4\frac{1}{10} + 6\frac{5}{10}$

16. $9\frac{7}{12} + 4\frac{9}{12}$

17. $5 + 3\frac{1}{8}$

18. $8\frac{3}{4} + 7\frac{3}{4}$

19. $2\frac{4}{5} + 7\frac{3}{5}$

20. $3\frac{2}{6} + 8\frac{5}{6}$

21. $1\frac{7}{12} + 2\frac{10}{12}$

22. $3\frac{6}{8} + 9\frac{3}{8}$

For 23, use the map at the right.

23. a. Find the distance from the start of the trail to the end of the trail:

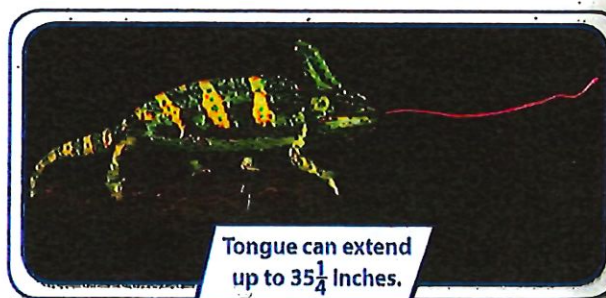
- b. Linda walked from the start of the trail to the bird lookout and back. Did Linda walk more or less than if she had walked from the start of the trail to the end?



24. Joe biked $1\frac{9}{12}$ miles from home to the lake, then went some miles around the lake, and then back home. Joe biked a total of $4\frac{9}{12}$ miles. How many miles did Joe bike around the lake?

25. **Reasoning** The bus took $4\frac{3}{5}$ hours to get from the station to Portland and $3\frac{4}{5}$ hours to get from Portland to Seattle. How long did the bus take to get from the station to Seattle?

26. **Higher Order Thinking** A male Parson's chameleon can be up to $23\frac{3}{4}$ inches long. It can extend its tongue up to $35\frac{1}{4}$ inches. What are 3 possible lengths for the chameleon when its tongue is extended?



Assessment

27. How long an extension cord can Julie make by attaching a $22\frac{3}{8}$ foot and a $26\frac{6}{8}$ foot cord together? Select all the possible sums.

- ☐ $22\frac{3}{8} + 26\frac{6}{8} = \frac{393}{8}$
- ☐ $22\frac{3}{8} + 26\frac{6}{8} = 49\frac{9}{12}$
- ☐ $22\frac{3}{8} + 26\frac{6}{8} = 49\frac{1}{8}$
- ☐ $22\frac{3}{8} + 26\frac{6}{8} = 48\frac{9}{8}$
- ☐ $22\frac{3}{8} + 26\frac{6}{8} = 48$

28. Mary skips $22\frac{1}{3}$ yards down a trail, then hops another $15\frac{2}{3}$ yards. How far is Mary down the trail? Select all the possible sums.

- ☐ $22\frac{1}{3} + 15\frac{2}{3} = 37$
- ☐ $22\frac{1}{3} + 15\frac{2}{3} = 37\frac{3}{3}$
- ☐ $22\frac{1}{3} + 15\frac{2}{3} = 38$
- ☐ $22\frac{1}{3} - 15\frac{2}{3} = 6\frac{2}{3}$
- ☐ $22\frac{1}{3} + 15\frac{2}{3} = \frac{114}{3}$

**Another Look!**

Janet grew a pumpkin that weighs $13\frac{3}{4}$ pounds and a melon that weighs $8\frac{2}{4}$ pounds. How much heavier is the pumpkin than the melon?

Subtract Mixed Numbers

- a. Subtract the fractions.

Rename whole

numbers as fractions as needed.

- b. Subtract the whole numbers.

$$13\frac{3}{4}$$

$$- 8\frac{2}{4}$$

$$\hline 5\frac{1}{4}$$

Subtract Fractions

- a. Write the mixed numbers as fractions.

- b. Subtract the fractions.

- c. Write the fraction as a mixed number.

$$13\frac{3}{4} = \frac{55}{4}$$

$$- 8\frac{2}{4} = - \frac{34}{4}$$

$$\hline \frac{21}{4} = 5\frac{1}{4}$$

The pumpkin is $5\frac{1}{4}$ pounds heavier than the melon.

You can subtract mixed numbers with like denominators using properties of operations.



For 1–16, find each difference by subtracting mixed numbers or subtracting equivalent fractions.

1. $10\frac{3}{4} - 7\frac{1}{4}$

2. $7\frac{4}{6} - 2\frac{3}{6}$

3. $3 - 2\frac{2}{3}$

4. $17\frac{8}{12} - 12\frac{3}{12}$

5. $9\frac{2}{6} - 6\frac{5}{6}$

6. $4\frac{1}{5} - 2\frac{3}{5}$

7. $6\frac{3}{12} - 3\frac{4}{12}$

8. $5\frac{2}{8} - 3\frac{7}{8}$

9. $8\frac{1}{4} - 7\frac{3}{4}$

10. $2\frac{9}{10} - 2\frac{5}{10}$

11. $6\frac{5}{6} - 5\frac{4}{6}$

12. $3 - 1\frac{3}{4}$

13. $11 - 2\frac{1}{2}$

14. $42\frac{6}{10} - 10$

15. $18\frac{1}{5} - 2\frac{2}{5}$

16. $27\frac{2}{6} - 12\frac{1}{6}$

17. **Vocabulary** Use a vocabulary word to complete the sentence.

A number that has a whole number part and a fraction part is called a(n)

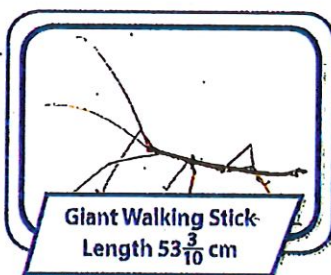
18. Some of the world's smallest horses include Thumbelina who stands $17\frac{1}{4}$ inches tall, Black Beauty who stands $18\frac{2}{4}$ inches tall, and Einstein who stands 14 inches tall.

- How much taller is Black Beauty than Thumbelina?
- How much taller is Thumbelina than Einstein?

19. **Reasoning** If Carol hangs a picture using $\frac{3}{8}$ yard of a wire that is $1\frac{1}{8}$ yards long, how much wire will Carol have left?

20. Write 6,219 in expanded form.

21. **Higher Order Thinking** Some of the largest insects in the world include the Rhinoceros Beetle, the Giant Walking Stick, and the Giant Weta Beetle. How much longer is the Giant Walking Stick than the Rhinoceros Beetle and the Giant Weta Beetle combined?



✓ Assessment

22. Jessie needs a board $7\frac{9}{12}$ feet long. She has a board $9\frac{1}{12}$ feet long. How much of the length does Jessie need to cut from the board? Use equivalent fractions to solve.
- $1\frac{1}{3}$ feet
 - $2\frac{8}{12}$ feet
 - $2\frac{2}{3}$ feet
 - $16\frac{10}{12}$ feet
23. Robyn ran $5\frac{3}{4}$ miles last week. She ran $4\frac{1}{4}$ miles this week. How many more miles did Robyn run last week? Use equivalent fractions to solve.
- $1\frac{1}{4}$ miles
 - $1\frac{1}{2}$ miles
 - $1\frac{3}{4}$ miles
 - 10 miles

5th Summer Math Review Packet Answer Key

Page 1 (textbook page 63)

1. 13,288
3. 950,000
5. 472,215
7. 150,840

Page 2 (textbook page 75)

1. 56,089
3. 393,803
5. 96,430
7. 10,674
9. 5,107
11. 4,008

Page 3 (textbook page 227)

1. 32
3. $111 + 2,960 = 3,071$
5. 2,408
7. 1,044
9. 2,162
11. 4,628
13. 2,541
15. 3,456
17. 378
19. 3,960
21. 1,089

Page 4 (textbook page 228)

23. Tree 2 made more
25. D

Page 5 (textbook page 305)

1. Estimate: $4,200 \div 7 = 600$
Answer: 616 R 6

3. 547 R 1
5. 458 R 2
7. 289 R 2

Page 6 (textbook page 306)

9. 2,401 meters
11. 145 seats
13. 144 fence posts

Page 7 (textbook page 431)

1. $\frac{9}{12} \div \frac{3}{3} = \frac{3}{4}$
3. $= \frac{3}{5}$
5. 2
7. 1
9. $\frac{1}{2}$
11. $\frac{1}{3}$

Page 7 (textbook page 431) continued

13. $\frac{9}{6} \div \frac{3}{3} = \frac{3}{2}$

15. $\frac{4}{12} \div \frac{2}{2} = \frac{2}{6}$

17. $\frac{20}{100} = \frac{10}{50} = \frac{1}{5} = \frac{5}{25} = \frac{4}{20} = \frac{2}{10}$

19. $\frac{16}{12} = \frac{8}{6} = \frac{4}{3}$

21. $\frac{24}{12} = \frac{2}{1} = \frac{12}{6} = \frac{6}{3} = \frac{8}{4}$

23. $\frac{90}{10} = \frac{9}{1} = \frac{45}{5} = \frac{18}{2}$

Page 8 (textbook page 432)

25. See table below

Animal	Fraction Sleeping	Equivalent Fraction
Cat	$\frac{12}{24}$	$\frac{1}{2} = \frac{2}{4} = \frac{3}{6} = \frac{4}{8}$
Cow	$\frac{4}{24}$	$\frac{2}{12} = \frac{1}{6}$
Squirrel	$\frac{15}{24}$	$\frac{5}{8}$
Tiger	$\frac{16}{24}$	$\frac{2}{3} = \frac{4}{6} = \frac{8}{12}$

27. 112 hours

29. Possibly, depending on the fraction.

31. A

Page 9 (textbook page 515)

1. $4\frac{2}{8} + 1\frac{1}{8} = 5\frac{3}{8}$

3. $3\frac{1}{8}$

5. $6\frac{1}{3}$

7. $4\frac{2}{3}$

9. $4\frac{1}{6}$

11. $8\frac{1}{2}$

13. $17\frac{1}{2}$

15. $10\frac{6}{10} = 10\frac{3}{5}$

17. $8\frac{1}{8}$

19. $10\frac{2}{5}$

21. $4\frac{5}{12}$

Page 10 (textbook page 516)

23. a. $6\frac{3}{4}$ miles

b. She walked more

25. $7\frac{2}{5}$ hours

27. Sums 1, 3, and 4

Page 11 (textbook page 523)

1. $3\frac{2}{4} = 3\frac{1}{2}$

3. $\frac{1}{3}$

5. $2\frac{3}{6} = 2\frac{1}{2}$

7. $2\frac{11}{12}$

9. $\frac{2}{4} = \frac{1}{2}$

11. $1\frac{1}{6}$

13. $8\frac{1}{2}$

15. $15\frac{4}{5}$

Page 12 (textbook page 524)

17. Mixed number

19. $\frac{6}{8}$ yards $= \frac{3}{4}$ yards

21. $28\frac{1}{10}$

23. B

